

Problems and Solutions... CRMO-2002

1. In an acute triangle ABC , points D, E, F are located on the sides BC, CA, AB respectively such that

$$\frac{CD}{CE} = \frac{CA}{CB}, \quad \frac{AE}{AF} = \frac{AB}{AC}, \quad \frac{BF}{BD} = \frac{BC}{BA}.$$

Prove that AD, BE, CF are the altitudes of ABC .

Solution: Put $CD = x$. Then with usual notations we get

$$CE = \frac{CD \cdot CB}{CA} = \frac{ax}{b}.$$

Since $AE = AC - CE = b - CE$, we obtain

$$AE = \frac{b^2 - ax}{b}, \quad AF = \frac{AE \cdot AC}{AB} = \frac{b^2 - ax}{c}.$$

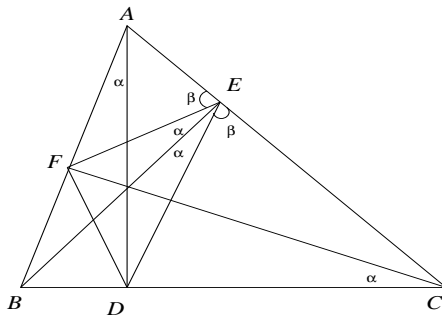


Fig. 1

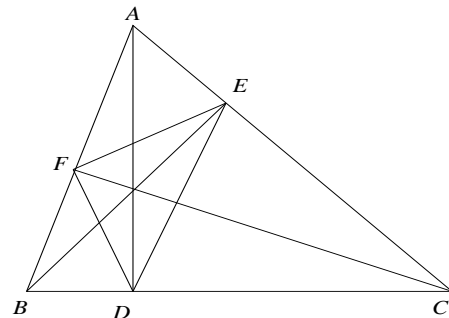


Fig. 2

This in turn gives

$$BF = AB - AF = \frac{c^2 - b^2 + ax}{c}.$$

Finally we obtain

$$BD = \frac{c^2 - b^2 + ax}{a}.$$

Using $BD = a - x$, we get

$$x = \frac{a^2 - c^2 + b^2}{2a}.$$

However, if L is the foot of perpendicular from A on to BC then, using Pythagoras theorem in triangles ALB and ALC we get

$$b^2 - LC^2 = c^2 - (a - LC)^2$$

which reduces to $LC = (a^2 - c^2 + b^2)/2a$. We conclude that $LC = DC$ proving $L = D$. Or, we can also infer that $x = b \cos C$ from cosine rule in triangle ABC . This implies that $CD = CL$, since $CL = b \cos C$ from right triangle ALC . Thus AD is altitude on to BC . Similar proof works for the remaining altitudes.

Alternately, we see that $CD \cdot CB = CE \cdot CA$, so that $ABDE$ is a cyclic quadrilateral. Similarly we infer that $BCEF$ and $CAFD$ are also cyclic quadrilaterals. (See Fig. 2.) Thus $\angle AEF = \angle B = \angle CED$. Moreover $\angle BED = \angle DAF = \angle DCF = \angle BCF = \angle BEF$. It follows that $\angle BEA = \angle BEC$ and hence each is a right angle thus proving that BE is an altitude. Similarly we prove that CF and AD are altitudes. (Note that the concurrence of the lines AD , BE , CF are not required.)

2. Solve the following equation for real x :

$$(x^2 + x - 2)^3 + (2x^2 - x - 1)^3 = 27(x^2 - 1)^3.$$

Solution: By setting $u = x^2 + x - 2$ and $v = 2x^2 - x - 1$, we observe that the equation reduces to $u^3 + v^3 = (u + v)^3$. Since $(u + v)^3 = u^3 + v^3 + 3uv(u + v)$, it follows that $uv(u + v) = 0$. Hence $u = 0$ or $v = 0$ or $u + v = 0$. Thus we obtain $x^2 + x - 2 = 0$ or $2x^2 - x - 1 = 0$ or $x^2 - 1 = 0$. Solving each of them we get $x = 1, -2$ or $x = 1, -1/2$ or $x = 1, -1$. Thus $x = 1$ is a root of multiplicity 3 and the other roots are $-1, -2, -1/2$.

(Alternately, it can be seen that $x - 1$ is a factor of $x^2 + x - 2$, $2x^2 - x - 1$ and $x^2 - 1$. Thus we can write the equation in the form

$$(x - 1)^3(x + 2)^3 + (x - 1)^3(2x + 1)^3 = 27(x - 1)^3(x + 1)^3.$$

Thus it is sufficient to solve the cubic equation

$$(x + 2)^3 + (2x + 1)^3 = 27(x + 1)^3.$$

This can be solved as earlier or expanding every thing and simplifying the relation.)

3. Let a, b, c be positive integers such that a divides b^2 , b divides c^2 and c divides a^2 . Prove that abc divides $(a + b + c)^7$.

Solution: Consider the expansion of $(a + b + c)^7$. We show that each term here is divisible by abc . It contains terms of the form $r_{klm}a^k b^l c^m$, where r_{klm} is a constant (some binomial coefficient) and k, l, m are nonnegative integers such that $k + l + m = 7$. If $k \geq 1, l \geq 1, m \geq 1$, then abc divides $a^k b^l c^m$. Hence we have to consider terms in which one or two of k, l, m are zero. Suppose for example $k = l = 0$ and consider c^7 . Since b divides c^2 and a divides c^4 , it follows that abc divides c^7 . A similar argument gives the result for a^7 or b^7 . Consider the case in which two indices are nonzero, say for example, bc^6 . Since a divides c^4 , here again abc divides bc^6 . If we take b^2c^5 , then also using a divides c^4 we obtain the result. For b^3c^4 , we use the fact that a divides b^2 . Similar argument works for b^4c^3, b^5c^2 and b^6c . Thus each of the terms in the expansion of $(a + b + c)^7$ is divisible by abc .

4. Suppose the integers $1, 2, 3, \dots, 10$ are split into two disjoint collections a_1, a_2, a_3, a_4, a_5 and b_1, b_2, b_3, b_4, b_5 such that

$$a_1 < a_2 < a_3 < a_4 < a_5,$$

$$b_1 > b_2 > b_3 > b_4 > b_5.$$

- (i) Show that the larger number in any pair $\{a_j, b_j\}$, $1 \leq j \leq 5$, is at least 6.
(ii) Show that $|a_1 - b_1| + |a_2 - b_2| + |a_3 - b_3| + |a_4 - b_4| + |a_5 - b_5| = 25$ for every such partition.

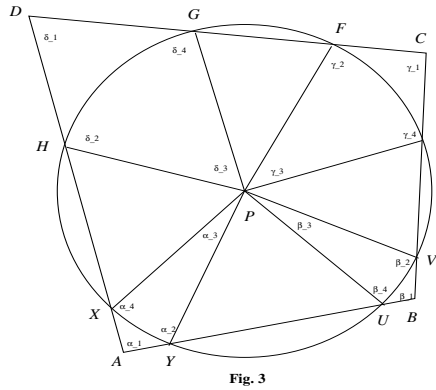
Solution:

- (i) Fix any pair $\{a_j, b_j\}$. We have $a_1 < a_2 < \dots < a_{j-1} < a_j$ and $b_j > b_{j+1} > \dots > b_5$. Thus there are $j - 1$ numbers smaller than a_j and $5 - j$ numbers smaller than b_j . Together they account for $j - 1 + 5 - j = 4$ distinct numbers smaller than a_j as well as b_j . Hence the larger of a_j and b_j is at least 6.
- (ii) The first part shows that the larger numbers in the pairs $\{a_j, b_j\}$, $1 \leq j \leq 5$, are 6, 7, 8, 9, 10 and the smaller numbers are 1, 2, 3, 4, 5. This implies that

$$|a_1 - b_1| + |a_2 - b_2| + |a_3 - b_3| + |a_4 - b_4| + |a_5 - b_5| = 10 + 9 + 8 + 7 + 6 - (1 + 2 + 3 + 4 + 5) = 25.$$

5. The circumference of a circle is divided into eight arcs by a convex quadrilateral $ABCD$, with four arcs lying inside the quadrilateral and the remaining four lying outside it. The lengths of the arcs lying inside the quadrilateral are denoted by p, q, r, s in counter-clockwise direction starting from some arc. Suppose $p + r = q + s$. Prove that $ABCD$ is a cyclic quadrilateral.

Solution: Let the lengths of the arcs XY, UV, EF, GH be respectively p, q, r, s . We also use the following notations: (See figure)



$\angle XAY = \alpha_1, \angle AYP = \alpha_2, \angle YPX = \alpha_3, \angle PXA = \alpha_4, \angle UBY = \beta_1, \angle BVP = \beta_2, \angle VPU = \beta_3, \angle PUB = \beta_4, \angle ECF = \gamma_1, \angle CFP = \gamma_2, \angle FPE = \gamma_3, \angle PEC = \gamma_4, \angle GDH = \delta_1, \angle DHP = \delta_2, \angle HPG = \delta_3, \angle PGD = \delta_4.$

We observe that

$$\sum \alpha_j = \sum \beta_j = \sum \gamma_j = \sum \delta_j = 2\pi.$$

It follows that

$$\sum (\alpha_j + \gamma_j) = \sum (\beta_j + \delta_j).$$

On the other hand, we also have $\alpha_2 = \beta_4$ since $PY = PU$. Similarly we have other relations: $\beta_2 = \gamma_4, \gamma_2 = \delta_4$ and $\delta_2 = \alpha_4$. It follows that

$$\alpha_1 + \alpha_3 + \gamma_1 + \gamma_3 = \beta_1 + \beta_3 + \delta_1 + \delta_3.$$

But $p + r = q + s$ implies that $\alpha_3 + \gamma_3 = \beta_3 + \delta_3$. We thus obtain

$$\alpha_1 + \gamma_1 = \beta_1 + \delta_1.$$

Since $\alpha_1 + \gamma_1 + \beta_1 + \delta_1 = 360^\circ$, it follows that $ABCD$ is a cyclic quadrilateral.

6. For any natural number $n > 1$, prove the inequality:

$$\frac{1}{2} < \frac{1}{n^2+1} + \frac{2}{n^2+2} + \frac{3}{n^2+3} + \cdots + \frac{n}{n^2+n} < \frac{1}{2} + \frac{1}{2n}.$$

Solution: We have $n^2 < n^2 + 1 < n^2 + 2 < n^2 + 3 \cdots < n^2 + n$. Hence we see that

$$\begin{aligned} \frac{1}{n^2+1} + \frac{2}{n^2+2} + \cdots + \frac{n}{n^2+n} &> \frac{1}{n^2+n} + \frac{2}{n^2+n} + \cdots + \frac{n}{n^2+n} \\ &= \frac{1}{n^2+n}(1+2+3+\cdots+n) = \frac{1}{2}. \end{aligned}$$

Similarly, we see that

$$\begin{aligned} \frac{1}{n^2+1} + \frac{2}{n^2+2} + \cdots + \frac{n}{n^2+n} &< \frac{1}{n^2} + \frac{2}{n^2} + \cdots + \frac{n}{n^2} \\ &= \frac{1}{n^2}(1+2+3+\cdots+n) = \frac{1}{2} + \frac{1}{2n}. \end{aligned}$$

7. Find all integers a, b, c, d satisfying the following relations:

- (i) $1 \leq a \leq b \leq c \leq d$;
- (ii) $ab + cd = a + b + c + d + 3$.

Solution: We may write (ii) in the form

$$ab - a - b + 1 + cd - c - d + 1 = 5.$$

Thus we obtain the equation $(a-1)(b-1) + (c-1)(d-1) = 5$. If $a-1 \geq 2$, then (i) shows that $b-1 \geq 2$, $c-1 \geq 2$ and $d-1 \geq 2$ so that $(a-1)(b-1) + (c-1)(d-1) \geq 8$. It follows that $a-1 = 0$ or 1 .

If $a-1 = 0$, then the contribution from $(a-1)(b-1)$ to the sum is zero for any choice of b . But then $(c-1)(d-1) = 5$ implies that $c-1 = 1$ and $d-1 = 5$ by (i). Again (i) shows that $b-1 = 0$ or 1 since $b \leq c$. Taking $b-1 = 0$, $c-1 = 1$ and $d-1 = 5$ we get the solution $(a, b, c, d) = (1, 1, 2, 6)$. Similarly, $b-1 = 1$, $c-1 = 1$ and $d-1 = 5$ gives $(a, b, c, d) = (1, 2, 2, 6)$.

In the other case $a-1 = 1$, we see that $b-1 = 2$ is not possible for then $c-1 \geq 2$ and $d-1 \geq 2$. Thus $b-1 = 1$ and this gives $(c-1)(d-1) = 4$. It follows that $c-1 = 1$, $d-1 = 4$ or $c-1 = 2$, $d-1 = 2$. Considering each of these, we get two more solutions: $(a, b, c, d) = (2, 2, 2, 5), (2, 2, 3, 3)$.

It is easy to verify all these four quadruples are indeed solutions to our problem.