

**Class X**  
**Mathematics**  
**Sample Question Paper 2018-19**

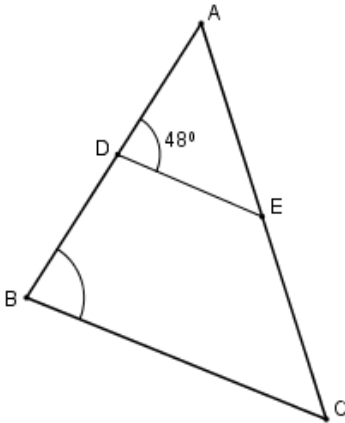
Time allowed: 3 Hours

Max. Marks: 80

**General Instructions:**

1. All the questions are compulsory.
2. The questions paper consists of 30 questions divided into 4 sections A, B, C and D.
3. Section A comprises of 6 questions of 1 mark each. Section B comprises of 6 questions of 2 marks each. Section C comprises of 10 questions of 3 marks each. Section D comprises of 8 questions of 4 marks each.
4. There is no overall choice. However, an internal choice has been provided in two questions of 1 mark each, two questions of 2 marks each, four questions of 3 marks each and three questions of 4 marks each. You have to attempt only one of the alternatives in all such questions.
5. Use of calculators is not permitted.

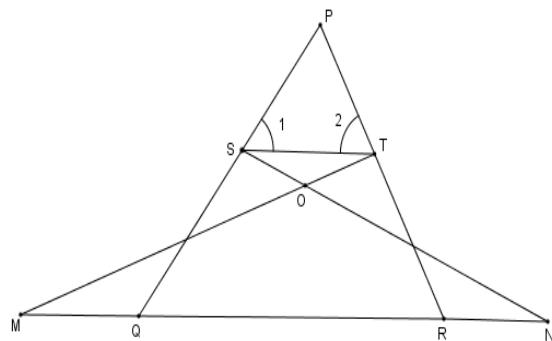
**Section-A**

<b>1.</b>	Find the value of a, for which point P ( $\frac{a}{3}$ , 2) is the mid-point of the line segment joining the points Q(-5,4) and R(-1,0).	<b>1</b>
<b>2.</b>	Find the value of k, for which one root of the quadratic equation $kx^2 - 14x + 8 = 0$ is 2.	<b>1</b>
<b>OR</b>		
	Find the value(s) of k for which the equation $x^2 + 5kx + 16 = 0$ has real and equal roots.	
<b>3.</b>	Write the value of $\cot^2\theta - \frac{1}{\sin^2\theta}$	<b>1</b>
<b>OR</b>		
	If $\sin\theta = \cos\theta$ , then find the value of $2\tan\theta + \cos^2\theta$	
<b>4.</b>	If nth term of an A.P. is $(2n+1)$ , what is the sum of its first three terms?	<b>1</b>
<b>5.</b>	In figure if AD= 6cm, DB=9cm, AE = 8cm and EC = 12cm and $\angle ADE = 48^\circ$ . Find $\angle ABC$	<b>1</b>
		
<b>6.</b>	After how many decimal places will the decimal expansion of $\frac{23}{2^4 \times 5^3}$ terminate?	<b>1</b>

<b>Section-B</b>		
<b>7.</b>	The HCF and LCM of two numbers are 9 and 360 respectively. If one number is 45, find the other number.	<b>2</b>
	<b>OR</b> Show that $7 - \sqrt{5}$ is irrational, give that $\sqrt{5}$ is irrational.	
<b>8.</b>	Find the 20 <sup>th</sup> term from the last term of the AP 3,8,13,.....,253	<b>2</b>
	<b>OR</b> If 7 times the 7 <sup>th</sup> term of an A.P is equal to 11 times its 11 <sup>th</sup> term, then find its 18 <sup>th</sup> term.	
<b>9.</b>	Find the coordinates of the point P which divides the join of A(-2,5) and B(3,-5) in the ratio 2:3	<b>2</b>
<b>10.</b>	A card is drawn at random from a well shuffled deck of 52 cards. Find the probability of getting neither a red card nor a queen.	<b>2</b>
<b>11.</b>	Two dice are thrown at the same time and the product of numbers appearing on them is noted. Find the probability that the product is a prime number	<b>2</b>
<b>12.</b>	For what value of p will the following pair of linear equations have infinitely many solutions $(p-3)x+3y = p$ $px+py = 12$	<b>2</b>
<b>Section-C</b>		
<b>13.</b>	Use Euclid's Division Algorithm to find the HCF of 726 and 275.	<b>3</b>
<b>14.</b>	Find the zeroes of the following polynomial: $5\sqrt{5}x^2+30x+8\sqrt{5}$	<b>3</b>
<b>15.</b>	Places A and B are 80 km apart from each other on a highway. A car starts from A and another from B at the same time. If they move in same direction they meet in 8 hours and if they move towards each other they meet in 1 hour 20 minutes. Find the speed of cars.	<b>3</b>
<b>16.</b>	The points A(1,-2) , B(2,3), C (k,2) and D(-4,-3) are the vertices of a parallelogram. Find the value of k.	<b>3</b>
	<b>OR</b> Find the value of k for which the points (3k-1,k-2), (k,k-7) and (k-1,-k-2) are collinear.	
<b>17.</b>	Prove that $\cot\theta - \tan\theta = \frac{2\cos^2\theta-1}{\sin\theta\cos\theta}$	<b>3</b>
	<b>OR</b> Prove that $\sin\theta(1 + \tan\theta) + \cos\theta(1 + \cot\theta) = \sec\theta + \operatorname{cosec}\theta$	
<b>18.</b>	The radii of two concentric circles are 13 cm and 8 cm. AB is a diameter of the bigger circle and BD is a tangent to the smaller circle touching it at D and intersecting the larger circle at P on producing. Find the length of AP.	<b>3</b>

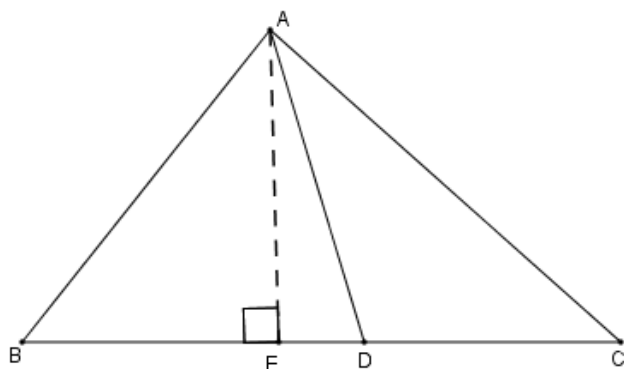
19. In figure  $\angle 1 = \angle 2$  and  $\Delta NSQ \cong \Delta MTR$ , then prove that  $\Delta PTS \sim \Delta PRQ$ .

3



OR

In  $\Delta ABC$ , if AD is the median, then show that  $AB^2 + AC^2 = 2(AD^2 + BD^2)$



20. Find the area of the minor segment of a circle of radius 42cm, if length of the corresponding arc is 44cm.

3

21. Water is flowing at the rate of 15 km per hour through a pipe of diameter 14cm into a rectangular tank which is 50 m long and 44 m wide. Find the time in which the level of water in the tank will rise by 21 cm.

3

OR

A solid sphere of radius 3 cm is melted and then recast into small spherical balls each of diameter 0.6cm. Find the number of balls.

22. The table shows the daily expenditure on grocery of 25 households in a locality. Find the modal daily expenditure on grocery by a suitable method.

3

Daily Expenditure (in Rs.)	100-150	150-200	200-250	250-300	300-350
No of households	4	5	12	2	2

<b>Section-D</b>																								
<b>23.</b>	A train takes 2 hours less for a journey of 300km if its speed is increased by 5 km/h from its usual speed. Find the usual speed of the train.	<b>4</b>																						
<b>OR</b>																								
Solve for x: $\frac{1}{(a+b+x)} = \frac{1}{a} + \frac{1}{b} + \frac{1}{x}$ , [ $a \neq 0, b \neq 0, x \neq 0, x \neq -(a + b)$ ]																								
<b>24.</b>	An AP consists of 50 terms of which 3 <sup>rd</sup> term is 12 and the last term is 106. Find the 29 <sup>th</sup> term.	<b>4</b>																						
<b>25.</b>	Prove that in a right angled triangle square of the hypotenuse is equal to sum of the squares of other two sides.	<b>4</b>																						
<b>26.</b>	Draw a $\Delta ABC$ with sides 6cm, 8cm and 9 cm and then construct a triangle similar to $\Delta ABC$ whose sides are $\frac{3}{5}$ of the corresponding sides of $\Delta ABC$ .	<b>4</b>																						
<b>27.</b>	A man on the top of a vertical observation tower observes a car moving at a uniform speed coming directly towards it. If it takes 12 minutes for the angle of depression to change from $30^\circ$ to $45^\circ$ , how long will the car take to reach the observation tower from this point?	<b>4</b>																						
<b>OR</b>																								
The angle of elevation of a cloud from a point 60 m above the surface of the water of a lake is $30^\circ$ and the angle of depression of its shadow from the same point in water of lake is $60^\circ$ . Find the height of the cloud from the surface of water.																								
<b>28.</b>	The median of the following data is 525. Find the values of x and y if the total frequency is 100.	<b>4</b>																						
<table border="1" style="margin-left: auto; margin-right: auto;"> <thead> <tr> <th style="text-align: center;">Class Interval</th> <th style="text-align: center;">Frequency</th> </tr> </thead> <tbody> <tr> <td style="text-align: center;">0-100</td> <td style="text-align: center;">2</td> </tr> <tr> <td style="text-align: center;">100-200</td> <td style="text-align: center;">5</td> </tr> <tr> <td style="text-align: center;">200-300</td> <td style="text-align: center;">x</td> </tr> <tr> <td style="text-align: center;">300-400</td> <td style="text-align: center;">12</td> </tr> <tr> <td style="text-align: center;">400-500</td> <td style="text-align: center;">17</td> </tr> <tr> <td style="text-align: center;">500-600</td> <td style="text-align: center;">20</td> </tr> <tr> <td style="text-align: center;">600-700</td> <td style="text-align: center;">Y</td> </tr> <tr> <td style="text-align: center;">700-800</td> <td style="text-align: center;">9</td> </tr> <tr> <td style="text-align: center;">800-900</td> <td style="text-align: center;">7</td> </tr> <tr> <td style="text-align: center;">900-1000</td> <td style="text-align: center;">4</td> </tr> </tbody> </table>			Class Interval	Frequency	0-100	2	100-200	5	200-300	x	300-400	12	400-500	17	500-600	20	600-700	Y	700-800	9	800-900	7	900-1000	4
Class Interval	Frequency																							
0-100	2																							
100-200	5																							
200-300	x																							
300-400	12																							
400-500	17																							
500-600	20																							
600-700	Y																							
700-800	9																							
800-900	7																							
900-1000	4																							

OR

The following data indicates the marks of 53 students in Mathematics.

Marks	Number of students
0-10	5
10-20	3
20-30	4
30-40	3
40-50	4
50-60	4
60-70	7
70-80	9
80-90	7
90-100	8

Draw less than type ogive for the data above and hence find the median.

<b>29.</b>	The radii of circular ends of a bucket of height 24 cm are 15 cm and 5 cm. Find the area of its curved surface.	<b>4</b>
<b>30.</b>	If $\sec\theta + \tan\theta = p$ , then find the value of $\operatorname{cosec}\theta$ .	<b>4</b>