

**SAMPLE PAPER****CLASS****6**

National Cyber Olympiad

The actual test paper has 50 questions. Time allowed : 60 minutes. There are 3 sections: 15 questions in section I, 15 in section II and 20 in section III.

SYLLABUS

Section – I (Mental Ability) : Roman Numerals, Numbers and Numeration, Prime and Composite Numbers, HCF and LCM, Addition and Subtraction, Multiplication and Division, Fractional Numbers, Decimal Fractions, Basic Geometrical Shapes, Angles, Triangles, Circles, Measurement of Length, Mass and Capacity, Time, Money, Profit and Loss, Temperature, Area and Perimeter, Volume, Pictorial Representation of Data, Integers, Factors and Multiples, Ratio and Proportion, Percentage.

Section – II (Logical and Analytical Reasoning) : Problems Based on Figures, Find Odd Numeral Out, Series Completion, Coding-Decoding, Mathematical Reasoning, Analytical Reasoning, Mirror Images, Embedded Figures.

Section – III (Computers and IT) : History and Generation of Computers, Types of Computers, MS-Windows, MS-Word, MS-Power Point, Internet & E-mail, Introduction to QBasic, Hardware, Software, Input & Output Devices, Memory & Storage Devices.



National Science Olympiad

The actual test paper has 50 questions. Time allowed : 60 minutes. There are 2 sections: 15 questions in section I and 35 in section II.

SYLLABUS

Section – I (Mental Ability) : Roman Numerals, Number Sense, HCF and LCM, Addition and Subtraction, Multiplication and Division, Fractional Numbers, Decimal Fractions, Geometrical Shapes, Angles, Arithmetical Ability, Measurements, Area and Perimeter of Rectangle, Square, Circle, Triangle, Volume, Pictorial Representation of Data, Integers, Factors and Multiples, Ratio and Proportion, Percentage, Problems Based on Figures, Find Odd Numeral Out, Series Completion, Coding-Decoding, Mathematical Reasoning, Mirror Images, Embedded Figures, Patterns, Direction Sense, Number Ranking, Alphabetical Test.

Section – II (Science) : Motion and Measurement of Distances, Light, Shadows and Reflections, Electricity & Circuits, Fun with Magnets, Air & Water, Sorting and Separation of Materials into Groups, Changes Around Us, Living Organisms & Their Surroundings, Food, Health & Hygiene, Fibres to Fabrics.

International
Mathematics Olympiad

The actual test paper has 50 questions. Time allowed : 60 minutes. There are 3 sections: 20 questions in section I, 20 in section II and 10 in section III.

Section – I : Logical Reasoning, **Section – II :** Mathematical Reasoning &

Section – III : Everyday Mathematics

SYLLABUS

Roman Numerals, Number Sense, HCF and LCM, Addition and Subtraction, Multiplication and Division, Fractional Numbers, Decimal Fractions, Geometrical Shapes, Angles, Arithmetical Ability, Area and Perimeter of Rectangle, Square, Circle, Triangle, Volume, Pictorial Representation of Data, Integers, Factors and Multiples, Ratio and Proportion, Percentage, Measurements.

Problems Based on Figures, Find Odd Numeral Out, Series Completion, Coding-Decoding, Mathematical Reasoning, Mirror Images, Embedded Figures, Patterns, Direction Sense, Number Ranking and Alphabetical Test.

International
English Olympiad

The actual test paper consists of 50 questions. Time Allowed : 60 minutes. There are 3 sections.

SYLLABUS

Section-I : Word and Structure Knowledge : Prepositions, Continuous tenses, Adjectives and Adverbs, Agreement, etc., Spellings, Collocations, Phrasal verbs, Idioms, and Words related to everyday problems, Relationships, Health and Medicine, Travel, etc.

Section-II: Reading : Search for and retrieve information from various text types like News headlines, Brochures, Formal letters, etc., Understand information given in News reports, Brochures, Itinerary, etc., Acquire broad understanding of and look for specific information in Short narratives, Timetables, News stories, etc.

Section-III: Spoken and Written Expression : Ability to understand situation-based variations in functions like agreement and disagreement, Requests, Refusals apologies, etc. and also distinguish differences in the use of conjunctions.



National Cyber Olympiad

MENTAL ABILITY

1. Find the number that should replace the box.

$$12 : 21 :: 8 : \square$$

- (A) 14 (B) 16 (C) 18 (D) 20

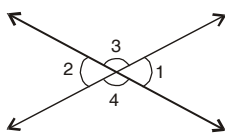
2. The product of two numbers is 3000. If the H.C.F. of the number is 10, then L.C.M. will be

- (A) 30 (B) 300 (C) 305 (D) 5

3. A basket contains 300 mangoes. 75 mangoes were distributed among students. The percentage of mangoes left in the basket is

- (A) 25% (B) 30% (C) 50% (D) 75%

4. For the following figure, which of the following is false?



- (A) $\angle 1 = \angle 2$ (B) $\angle 4 = \angle 3$
 (C) $\angle 3 + \angle 1 = 180^\circ$ (D) $\angle 1 = \angle 4$

LOGICAL & ANALYTICAL REASONING

5. $11111 - 1111 + 111 - 11 + 1$ is

- (A) 12345 (B) 10101 (C) 9901 (D) 102

6. $6 + 0 \div 6 \times 2 + 1$ equals

- (A) 18 (B) 7 (C) 3 (D) 0

7. If $\square + 50 = \triangle$ and $\square - 50 = \circ$,
 what is the correct relation between \triangle and \circ ?

- (A) $50 + \circ = \triangle$ (B) $50 - \circ = \triangle$ (C) $100 + \circ = \triangle$ (D) $100 - \circ = \triangle$

8. I think of a number, add 10 to it and divide the answer by 2. Let the resulting number be α . Starting with α , how can I get my original number back ?

- (A) Multiply α by 2 and then subtract 10 from the result
 (B) Divide α by 2 and then add 10 to the result
 (C) Multiply α by 2 and then add 10 to the result
 (D) Add 2 to α and then divide the resulting number by 10

COMPUTERS & INFORMATION TECHNOLOGY

9. The following steps results in

- (1) Choose the insert ► picture ► clipart
 (2) Select the picture
 (3) Click insert clip
 (A) Insertion of a picture to the file from clipart
 (B) Insertion of the clipart from a file to another similar file
 (C) Insertion of the picture from file to clipart file
 (D) All of the above

10. The software program that acts as an interface between the user and the www is


- (A) E-mail (B) Internet
 (C) Protocol (D) Web browser.

11. PARAM is a
 (A) Super computer (B) Mini computer
 (C) Main computer (D) Micro computer
-
12. Which of the following is a volatile memory ?
 (A) ROM (B) RAM (C) EPROM (D) PROM
-
13. By clicking which button one can return the window to its previous size ?
 (A) Maximize button (B) Minimize button
 (C) Restore button (D) Close button
-
14. To switch between the running applications
 (A) Press F1 (B) Press ALT + F4
 (C) Press TAB (D) Press and hold down ALT and press TAB.
-
15. Cut, copy and paste are the part of which of the menu ?
 (A) VIEW (B) FAVORITES (C) FORMAT (D) EDIT
-



National Science Olympiad

MENTAL ABILITY

1. Find L.C.M. of following numbers.
 12, 24, 48, 108
 (A) 504 (B) 432 (C) 405 (D) 440
-
2. Gita has 558 flags to pack into boxes. Each box will hold 62 flags. How many boxes will Gita need to hold all the flags ?
 (A) 34,596 (B) 0.9 (C) 9 (D) 620
-
3. 
 Which best describes the location of point X ?
 (A) 58 (B) 40 (C) 44 (D) 54
-
4. What is the area of a rectangle that measures 5 meters wide and 6 meters long ?
 (A) 11 m² (B) 22 m² (C) 30 m² (D) 16 m²
-
5. If n represents a number, which of these means the same as the expression $n + 6$?
 (A) Six more than a number (B) Six divided by a number
 (C) Six less than a number (D) Six times a number

SCIENCE

6. The body system that gives you support and allows movement is the
 (A) Skeletal system (B) Circulatory system
 (C) Respiratory system (D) Excretory system
-
7. Which food group BEST provides the necessary nutrients for healthy teeth and bones ?
 (A) Milk and dairy products (B) Fruits and vegetables
 (C) Bread and cereal (D) Meat
-

8. The Sun is a
 (A) Comet (B) Star (C) Huge planet (D) Satellite
-
9. The Earth is surrounded by an insulating blanket of gases which protects it from the light and heat of the Sun. This insulating layer is called the
 (A) Hydrosphere (B) Lithosphere (C) Atmosphere (D) Biosphere
-
10. Which part of the body receives messages transmitted by nerve cells located throughout the body?
 (A) Heart (B) Lungs (C) Brain (D) Liver
-
11. Which of the following has an organic origin?
 (A) Sand (B) Bakelite (C) Nylon (D) Coal
-
12. Which is usually NOT a reason why foods are processed?
 (A) More nutritious (B) Easier to package
 (C) Last longer on the shelf (D) Easier to transport to the store
-
13. What force pulls things toward the center of Earth?
 (A) Friction (B) Gravity (C) Magnetism (D) Electricity
-
14. Who discovered the circulation of blood?
 (A) Edward Jenner (B) William Harvey
 (C) Hargobind Khorana (D) Louis Pasteur
-
15. If you dissolved a lot of salt in some water in a large flat dish and put the dish in bright sunlight on a hot day, what would be left in the dish after a long time?
 (A) Dry salt (B) Water with no salt
 (C) The same salty water as before (D) Nothing

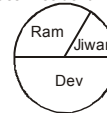


International Mathematics Olympiad

LOGICAL REASONING

1. The following are the results from the class election.
 If 150 students voted, about how many votes did Ram receive?
 (A) 25 (B) 38
 (C) 50 (D) 75

Class President Results



2. The weekly milk order for the New Guest house includes 40 litres of low-fat milk and 15 litres of chocolate milk. What is the ratio of the number of low-fat milk to chocolate milk in the New Guest house's weekly milk order?
 (A) 3 : 1 (B) 5 : 1 (C) 5 : 3 (D) 8 : 3

3. Joy wants to save ₹ 50 to buy a pair of roller blades. He plans to save ₹ 2 in the first month, ₹ 4 in the second month, ₹ 6 in the third month, and ₹ 8 in the fourth month. If Joy continues this savings pattern, how many months will it take Joy to save ₹ 50?
 (A) 5 months (B) 7 months
 (C) 9 months (D) 13 months

Month	Amount saved during month	Total savings
1	₹ 2	₹ 2
2	₹ 4	₹ 6
3	₹ 6	₹ 12
4	₹ 8	₹ 20
•	•	•
•	•	•
•	•	•



International English Olympiad

WORD AND STRUCTURE KNOWLEDGE

- Complete the word using the letters from the given below options.
The magician had clever___ concealed several rabbits in his hat.
(A) Fully (B) Ness (C) Ly (D) Ity
- Choose the correct expression.
(A) Bird in hand (B) Bird in the pocket (C) Bird and hand (D) Hand me the bird
- Choose the odd phrase.
(A) Take off (B) Take on (C) Take up (D) Take it
- The is fine today. Let's go for a picnic.
(A) Weather (B) Wheather (C) Whether (D) Wether
- Choose the odd pair.
(A) Cooking : Utensils (B) Painting : Canvas
(C) Sailing : Anchor (D) Mountaineering : Paddle
- Spot the error.
This history test is so difficult / as I think / I'm going to fail. No error
(A) (B) (C) (D)
- Spot the incorrect sentence.
(A) Have you ever been to Burma? (B) Was anybody injured in the accident?
(C) How long have you been knowing him? (D) When was the telephone invented?
- Priya nor Seema have gone to see the movie.
(A) Each (B) Neither (C) Both (D) Rather

READING

Direction (Q. No. 9 and 10) : Read the paragraph and choose the correct sentence.

Noodles were originally made using grains from millet, unlike the modern variety, which is made of wheat flour. Many cultures across the world claim to have invented it, but in 2005 the remains of the world's oldest noodles were unearthed in China. The yellow strands measuring 50 cm were found in a pot in Lajia along the Yellow River. It is believed that the pot got buried in an earth quake 4000 years ago.

- The modern day noodles are made of
(A) Millet (B) Grains (C) Millet and wheat flour (D) Wheat flour
- We know that noodles were made thousands of years ago in China because the
(A) Chinese claim that they invented noodles.
(B) Oldest noodles have been discovered in China.
(C) Historians say so.
(D) Chinese still eat noodles.

Direction (Q. No. 11 and 12) : Read the paragraph and choose the correct sentence.

The surface of the Earth is not evenly flat. Mountains and plateaus cover large areas giving variety to the earth's surface. Mountains are spectacular features that rise several hundred metres above the surrounding land. When a hill is above 600 metres, it is generally called a mountain. If a chain of mountains exists, it is referred to as a mountain range. The Himalayas which form the northern boundary of India is one of the most spectacular mountain ranges in the world.

11. The word "evenly" in this context means
(A) Equal (B) Plain (C) Level (D) Still
-

12. Choose the right sentence.
(A) Mountains and hills are the same.
(B) Mountains are big hills.
(C) Hills which are not very high are called mountains.
(D) A mountain is always a part of a mountain range.

SPOKEN AND WRITTEN EXPRESSION

Direction (Q. No. 13 to 15) : Complete the paragraph. Choose the most suitable sentence.

13. Asha: Why are you in such a hurry to go home today?

Tara: _____

Asha: I am sure you are eager to see her.

- (A) I will go when I like.
(B) Going to my home is not difficult because my sister will come with me.
(C) My aunt is coming home from London after two years.
(D) I am always in a hurry to go home.
-

14. Asif: Arun, where were you yesterday? I had come home and I found it locked.

Arun: _____

Asif: I hope you found her hale and hearty.

- (A) I like going out for long walks with my dog.
(B) I'd gone to visit my grandmother along with my parents.
(C) We could have gone cycling along orchard road.
(D) My house was locked throughout this summer.
-

15. Sentence 1 : The Amazon river is the largest river in the world with a total river flow greater than the next ten largest rivers combined.

Sentence 2 : _____

Sentence 3 : Because of its vast dimensions, it is sometimes called *The River Sea*.

- (A) However, in terms of length it is slightly shorter than the Nile.
(B) The Amazon river is surrounded by thick rain forest.
(C) Hundreds of people use the Amazon river to transport goods.
(D) The Amazon river is in South America.
-

